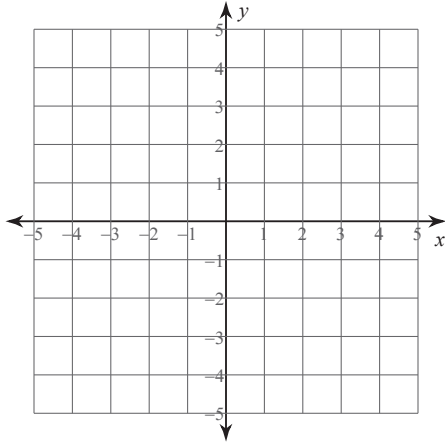


## Solving Systems of Equations by Graphing

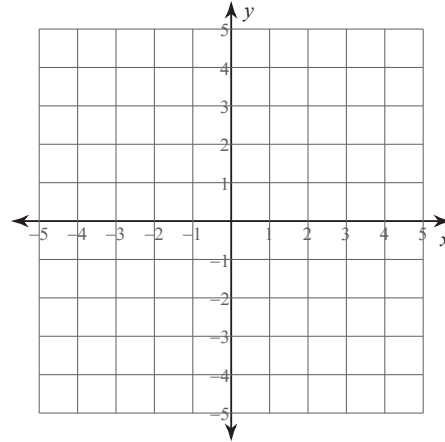
Solve each system by graphing.

1)  $y = -\frac{5}{3}x + 3$

$y = \frac{1}{3}x - 3$

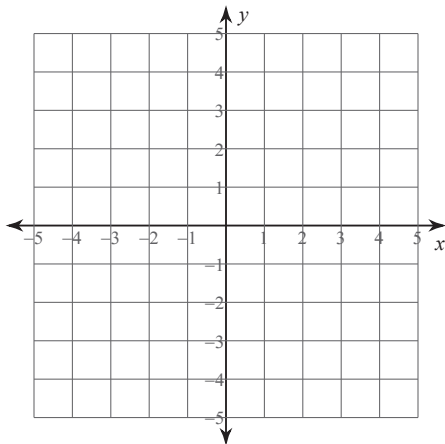


2)  $y = 4x + 3$   
 $y = -x - 2$

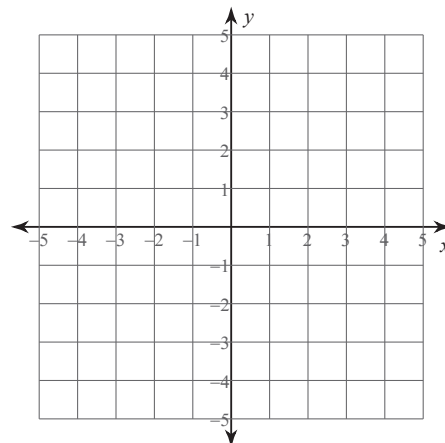


3)  $y = -\frac{1}{2}x - 1$

$y = \frac{1}{4}x - 4$

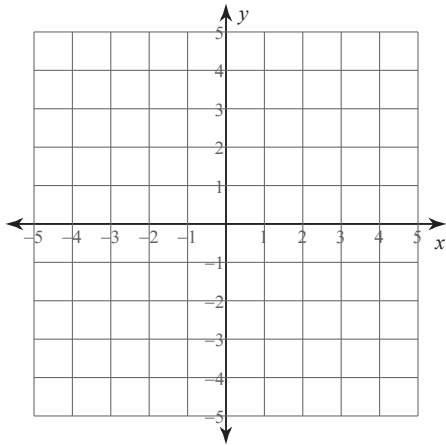


4)  $y = -1$   
 $y = -\frac{5}{2}x + 4$



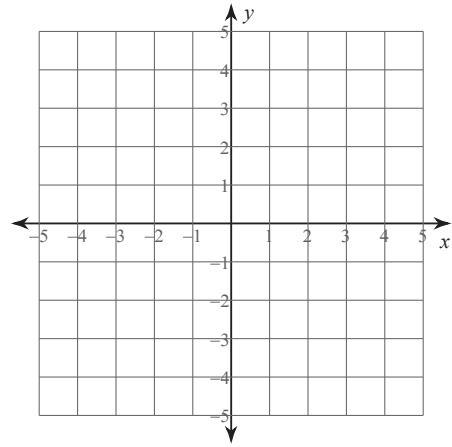
5)  $y = 3x - 4$

$y = -\frac{1}{2}x + 3$



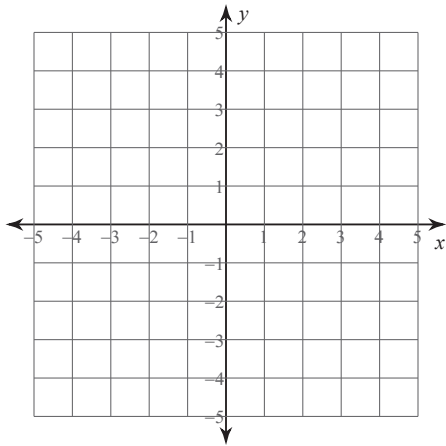
6)  $y = -2x + 2$

$y = -2x - 2$



7)  $y = -\frac{1}{2}x - 2$

$y = -\frac{3}{2}x + 2$



8)  $y = \frac{1}{3}x - 3$

$y = -x + 1$

